

## Math 75B Practice Problems for Midterm III

§§4.6-5.5

**DISCLAIMER.** This collection of practice problems is *not* guaranteed to be identical, in length or content, to the actual exam. You may expect to see problems on the test that are not exactly like problems you have seen before.

On the actual exam you will have more room to work the problems. You will see directions similar to these:

1. Please read directions carefully. Raise your hand if you are not sure what a problem is asking.
2. *You must explain your work thoroughly and unambiguously to receive full credit on questions or parts of questions designated as **Work and Answer**.*
3. **No calculators or notes are allowed on this exam.**
4. You have 50 minutes to complete your test, unless announced otherwise. Do not spend too long on any one problem. You do not have to do the problems in order. Do the easy ones first. Do not attempt the bonus question until you have completed the rest of the test. Before turning in your test, please make sure you have answered and double-checked all the questions.
5. If you need scratch paper, please raise your hand. You may not use your own paper. When you have finished your exam, please turn in any scratch paper you use.
6. Write your solutions in the space provided for each problem, or provide specific instructions as to where your work is to be found. *Make it clear what you want and don't want graded.* Your final answers should be boxed or circled.
7. Unless directed otherwise, only EXACT ANSWERS will receive full credit (i.e.  $\sqrt{2}$ , not 1.414).
8. In word problems, give units on all answers (e.g. feet, grams, gallons).
9. Don't stress! I'm rooting for you!

---

**True or False.** Circle **T** if the statement is *always* true; otherwise circle **F**.

1. If the velocity of an object at time  $t$  is  $v(t) = 4t^2 + 1$  ft./s, then its distance in feet at time  $t$  is  $s(t) = \frac{4}{3}t^3 + t$ . **T**      **F**
2. The function  $F(x) = \sin 2x + 52$  is an antiderivative of the function  $f(x) = 2 \cos 2x$ . **T**      **F**
3. The function  $G(x) = 4x^3$  is an antiderivative of the function  $g(x) = x^4 - 2$ . **T**      **F**
4.  $-1 + 0 + \frac{1}{3} + \frac{1}{2} + \frac{3}{5} + \frac{2}{3} = \sum_{i=-1}^4 \frac{i}{i+2}$ . **T**      **F**
5.  $\sum_{i=2}^4 \frac{i^2}{2} = \frac{29}{2}$ . **T**      **F**

6. If  $g(x)$  is an odd function which is continuous on the interval  $[-3, 3]$ , then **T** **F**  
 $\int_{-3}^3 g(x) dx = 0.$
7. If  $h(x)$  is an even function which is continuous on the interval  $[-3, 3]$ , then **T** **F**  
 $\int_{-3}^3 h(x) dx = 2 \int_0^3 h(x) dx.$

**Multiple Choice.** Circle the letter of the best answer.

1. If  $x_1 = 1$  is a first approximation of a solution to the equation  $x^4 = 6 - 3x$ , then using Newton's Method the second approximation is  $x_2 =$

- (a)  $\frac{9}{7}$  (c)  $\frac{9}{2}$   
 (b)  $\frac{5}{7}$  (d)  $-\frac{5}{2}$

2.  $\int_{-2}^2 \sqrt{4 - x^2} dx =$

- (a)  $-\frac{1}{6}$  (c)  $2\pi$   
 (b)  $0$  (d) does not exist.

3.  $\int_0^{\pi/4} \sec x \tan x dx =$

- (a)  $\sqrt{2} - 1$  (c)  $1 - \frac{\sqrt{2}}{2}$   
 (b)  $\sqrt{2}$  (d) does not exist.

4. If  $f(x)$  is continuous, then  $\int_0^{\pi/4} f(x) dx - \int_0^{\pi} f(x) dx =$

- (a)  $\int_{\pi/4}^{\pi} f(x) dx$  (c)  $\int_0^{3\pi/4} f(x) dx$   
 (b)  $\int_{\pi}^{\pi/4} f(x) dx$  (d)  $\int_{\pi}^0 f(x) dx$

5. If  $u = 3x^2 - 5$ , then the integral  $\int x \cos^2(3x^2 - 5) dx$  is equivalent to

- (a)  $\int u \cos^2(u) du$  (c)  $\frac{1}{3} \int \cos^2(u) du$   
 (b)  $\frac{1}{2} \int \cos^2(u) du$  (d)  $\frac{1}{6} \int \cos^2(u) du$

For #6-7, use the graph of  $f(x)$  shown below to answer the questions.

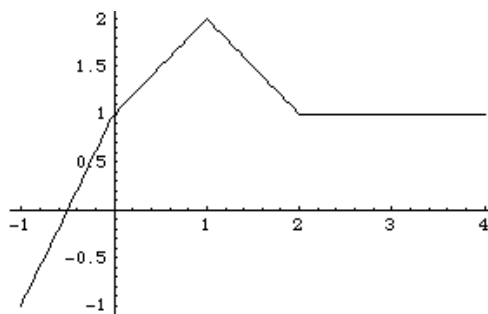
6.  $\int_{-1}^0 f(x) dx =$

(a)  $-1$

(b)  $0$

(c)  $1$

(d)  $2$



7.  $\int_2^1 f(x) dx =$

(a)  $-\frac{3}{2}$

(b)  $\frac{3}{2}$

(c)  $-1$

(d)  $1$

**Fill-In.** If an answer is undefined, write "D.N.E."

1.  $\int (\sqrt[3]{x} - \sec^2 x) dx =$  \_\_\_\_\_ .

4.  $\int_{-1}^2 \sqrt[3]{x} dx =$  \_\_\_\_\_ .

2.  $\int \frac{1}{\sqrt{1-x^2}} dx =$  \_\_\_\_\_ .

5.  $\int 3e^{5x} dx =$  \_\_\_\_\_ .

3.  $\int_{-1}^2 \sqrt[4]{x} dx =$  \_\_\_\_\_ .

6.  $\int \cos(3x - 5) dx =$  \_\_\_\_\_ .

7. If the interval  $[-4, 7]$  is divided into 6 equal subintervals, then the width of each subinterval is \_\_\_\_\_ .

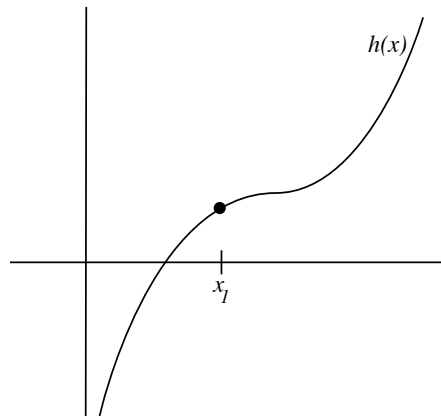
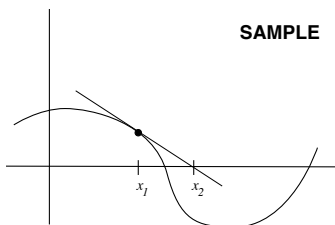
8.  $\int_{-2}^1 |x| dx =$  \_\_\_\_\_ .

9. If  $F(x) = \int_5^x \sqrt{5t - t^4} dt$ , then  $F'(x) =$  \_\_\_\_\_ .

10. If  $G(x) = \int_x^{\sqrt{\pi}} \cot(6t^2) dt$ , then  $G'(x) =$  \_\_\_\_\_ .

**Graph.**

For the function  $h(x)$  graphed at right and the initial guess  $x_1$  shown, draw tangent lines to determine  $x_2$  and  $x_3$  according to Newton's Method, as in the sample (the sample is only completed through  $x_2$ ). Label  $x_2$  and  $x_3$  on the  $x$ -axis.



**Work and Answer.** *You must show all relevant work to receive full credit.*

1. Estimate the root of  $f(x) = x^3 + 2x - 1$  using two iterations of Newton's Method (*i.e.* compute  $x_3$ ) with the initial guess  $x_1 = 0$ . *Express your answer as an exact fraction.*

2. Evaluate  $\int \frac{2}{t^3} dt$ .

3. Evaluate  $\int \frac{2}{1+x^2} dx$ .

4. Evaluate  $\int_0^{\pi/3} x^2 - \sin x dx$ .

5. (a) Estimate  $\int_0^\pi \sin \theta \, d\theta$  using 3 rectangles and midpoints.

(b) Evaluate  $\int_0^\pi \sin \theta \, d\theta$  exactly.

(c) What is the error of the estimate you made in part (a)?

6. If  $F(x) = \int_5^{\sin^2 x} (3t - 5) \, dt$ ,

(a) Evaluate  $F'(x)$ .

(b) Evaluate  $F(x)$ .

(c) Show that the derivative of the function you obtained in (b) equals the function you obtained in (a).

7. An object travels in a straight line with velocity function  $v(t) = \frac{3}{t} - 4e^t$  feet per second. Determine the net change in position (in feet) over the time interval  $2 \leq t \leq 5$ .

8. Evaluate  $\int x^3 \cos(9x^4 - 2) \, dx$ .

9. Evaluate  $\int \sin^3(x) \cos(x) \, dx$ .

10. Evaluate  $\int x \sin^3(x^2) \cos(x^2) \, dx$ .

**Hint.** You may find it helpful to use your answer to Work and Answer #9.

Some kind of **BONUS**.